



PHF ELITE SCHOOLS

EDUCATION SKILLS FOR ALL

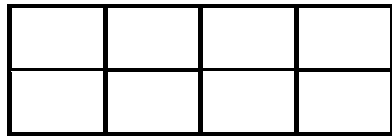
Making Learning Easier

Tel / WhatsApp: +256789610816 E-mail: info@palmhopesfoundation.org

PRIMARY FOUR MATHEMATICS REVISION WORK– 2025

NAME: _____ STREAM _____

1. Write the shaded and unshaded fraction



shaded _____

Unshaded _____

2. Add the fractions

$$\frac{3}{15} + 4 =$$

$$15 + \frac{1}{15} =$$

3. Kalton had $\frac{4}{9}$ of the cake. She ate $\frac{1}{9}$. What fraction did she remain with?

4. Write in words

a) $\frac{2}{8}$ _____

b) $\frac{3}{4}$ _____

c) $\frac{2}{5}$ _____

5. Use > < or = to compare

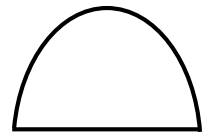
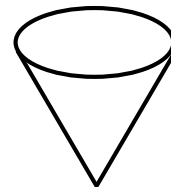
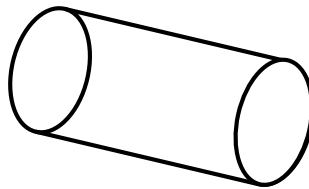
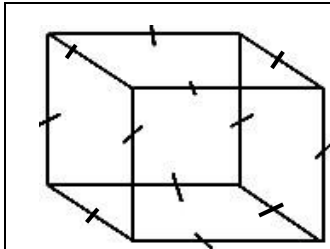
a) $\frac{1}{4}$ is _____ $\frac{1}{2}$

b) $\frac{1}{3}$ is _____ $\frac{1}{9}$

c) $\frac{4}{4}$ is _____ 1

Geometry

6. Name these shapes



7. Draw these shapes

Square	rectangle	kite	oval	

8. How many triangles can you see?

