



PHF ELITE SCHOOLS

EDUCATION SKILLS FOR ALL

Making Learning Easier

Tel / WhatsApp: +256789610816 E-mail: info@palmhopesfoundation.org

PRIMARY THREE LITERACY II REVISION WORK– 2025

NAME: _____ STREAM _____

1a) What is a sub county? _____

b) Write the name of the sub county in which your school is located.

c) What title is given to the person who heads a sub county.




d) In which parish is your school located?

2a) What is a map? _____

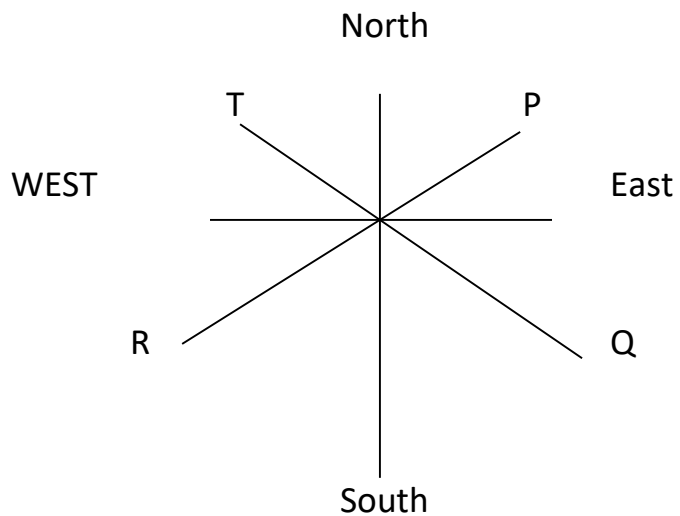
b) Given any three elements of a good map?

c) Mention any one difference between a map and a picture.

d) Draw the map of each of growing pictures.

3a) Study the diagram below and answer the questions that follow.



Name the secondary points.

T _____ P _____

Q _____ R _____

b. How is the above instrument useful?

c. Name any two groups of people who use the above instrument.

i) _____ ii) _____

d) Name the determinant point of the above instrument.

e. From which direction does the sun

rise _____ set _____

f. Apart from using the above instrument, name any other ways of locating directions of places.
