



# PHF ELITE SCHOOLS

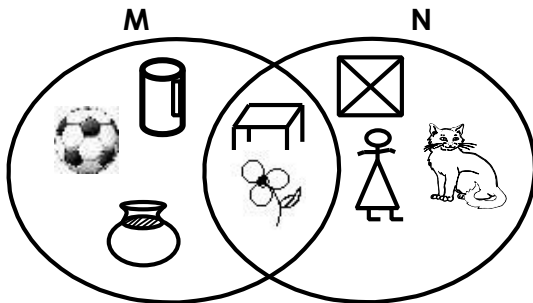
EDUCATION SKILLS FOR ALL

Making Learning Easier

Tel / WhatsApp: +256789610816 E-mail: [info@palmhopesfoundation.org](mailto:info@palmhopesfoundation.org)

REVISION WORK FOR P.2 CLASS – 2025

1. Study the sets below and answer the questions.



a) How many members are in set **M**?

---

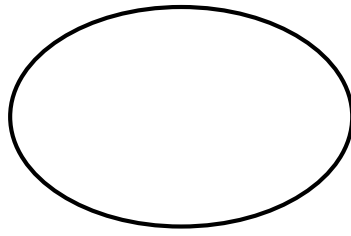
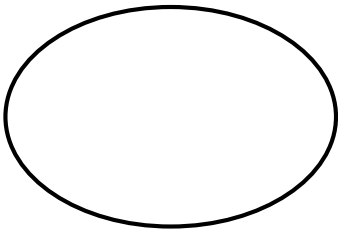
b) List down the members of set **N**.

---

c) Draw members in each set from the Venn diagram above.

**M**

**N**



(1 mks each )

2. **Read and answer.**

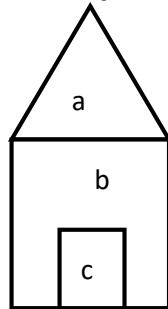
Dora weighs **24kg**. Tendo weighs **18kg**.

a) Who is heavier?

---

b) Find their total weight.

3. Name the shapes shown on the hut below.

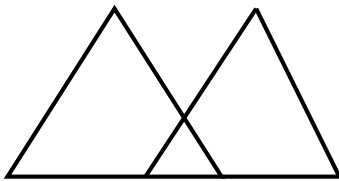


a \_\_\_\_\_

b \_\_\_\_\_

c \_\_\_\_\_

4.a) How many triangles can you see?



\_\_\_\_\_

b) Name **any one** shape that has **4** sides.

\_\_\_\_\_

5. Use repeated addition to work out.

a)  $5 \times 2 =$  \_\_\_\_\_

b)  $3 \times 3 =$  \_\_\_\_\_

6.a) How many halves are in **2** wholes.

\_\_\_\_\_

b) **Work out:**

$\frac{1}{3}$  of 6

7. Fill in correctly. (show the working)

a)  $+ 3 \boxed{\phantom{00}} = 10$

b)  $14 - \boxed{\phantom{00}} = 14$

c)  $2 \times \boxed{10} =$

d)  $18 \div 9 \boxed{\phantom{00}}$

8. Study the price list below and answer the questions.

		pencil			tomato		
Shs.		300	orange			Shs. 900	
Shs.		500					

a) How much money do I need to pay for a tomato?

\_\_\_\_\_ b) What is the most expensive item?

\_\_\_\_\_ c) What is the total cost of an orange and a pencil?

\_\_\_\_\_

9. Work out:

a) Shs. 1 0 0

b) Shs. 5 0 0

+ Shs. 2 5 0

– Shs. 2 5 0